


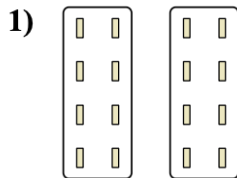
**Objective: I can understand multiplication using visuals and equal groups.**



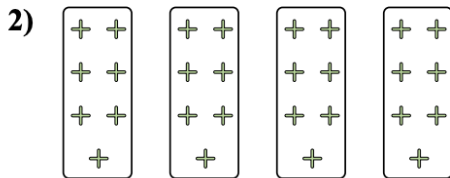
Example:

9 groups with 7 apples in each group =  $9 \times 7 = 63$


Write a multiplication equation to go with each picture.



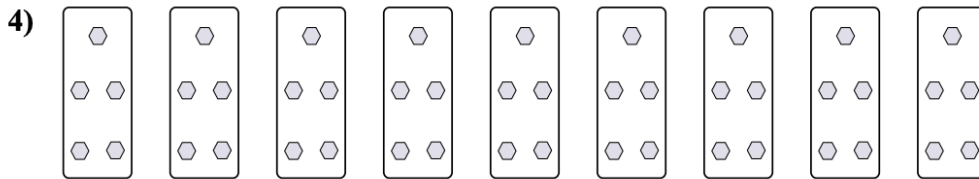
\_\_\_\_\_



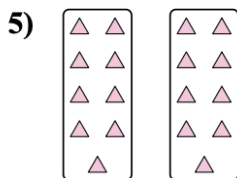
\_\_\_\_\_



\_\_\_\_\_



\_\_\_\_\_



\_\_\_\_\_



#Yougothis

## Answers

1.  $2 \times 8 = 16$

2.  $4 \times 7 = 28$

3.  $6 \times 2 = 12$

4.  $9 \times 5 = 45$

5.  $2 \times 9 = 18$